

Extensions Unit, Station 4, Round 1, Task 2



Finding Perimeter

with Decimals

Name:

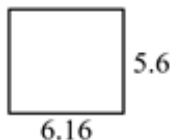
Answer Key

Find the perimeter
to scale.

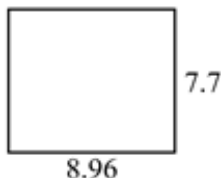
of each figure. Each figure is in centimeters (cm). Not

Answers

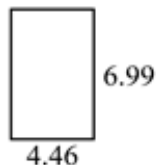
1)



2)



3)



1. 23.52 cm

2. 33.32 cm

3. 22.9 cm

4. 22.98 cm

5. 25.58 cm

6. 18.56 cm

7. 17.74 cm

8. 33 cm

9. 25.76 cm

10. 27.66 cm

11. 26.92 cm

12. 27.94 cm

13. 16.62 cm

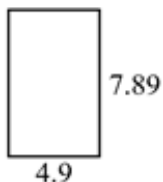
14. 11.38 cm

15. 12 cm

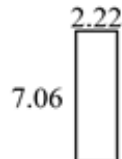
4)



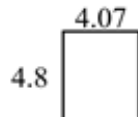
5)



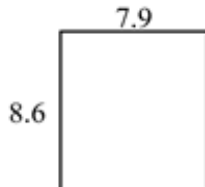
6)



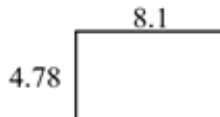
7)



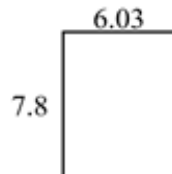
8)



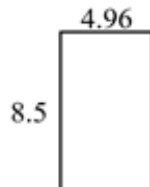
9)



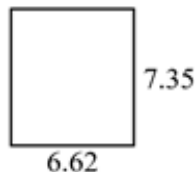
10)



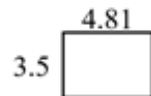
11)



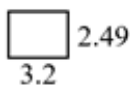
12)



13)



14)



15)

